







Escola: EMEF "Elysiário Del' Álamo"

Nome: _____ PRÉ II _____

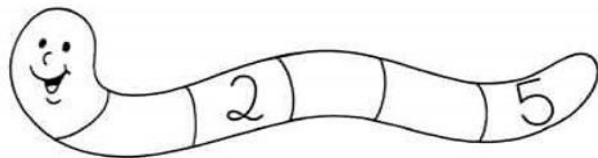
Professoras: ALINE, CÁSSIA E MARIA CLEMILDA

Data: ___ / ___ / 2.020

LIGUE CADA CONJUNTO AO NÚMERO QUE CORRESPONDE A QUANTIDADE DE ELEMENTOS:



COMPLETE COM OS NÚMEROS QUE ESTÃO FALTANDO:



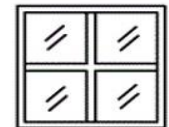
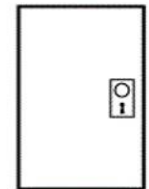
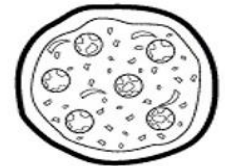
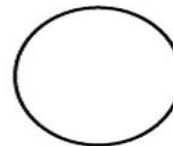
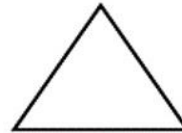
Escola: EMEF "Elysiário Del' Álamo"

Nome: _____ PRÉ II _____

Professoras: ALINE, CÁSSIA E MARIA CLEMILDA

Data: ___ / ___ / 2.020

LIGUE OS OBJETOS A SUAS FORMAS CORRESPONDENTE:



AGORA CUBRA OS PONTILHADOS DAS FIGURAS GEOMÉTRICAS:

